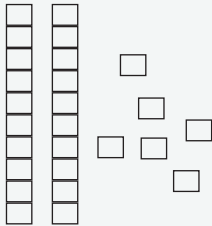


Counting tens and ones

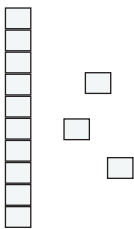
Grade 1 Base Ten Blocks Worksheet

Find the total number of blocks.

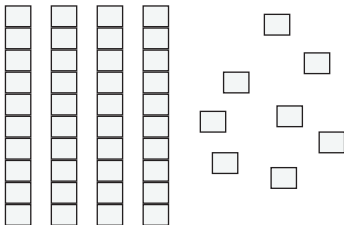
Example:



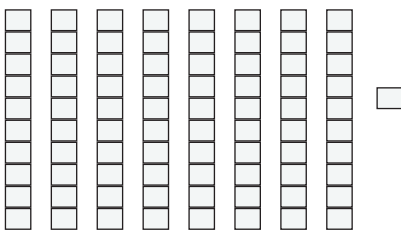
$$= \underline{2} \text{ tens} + \underline{6} \text{ ones} = \underline{26}$$



$$= \underline{\quad} \text{ tens} + \underline{\quad} \text{ ones} = \underline{\quad}$$



$$= \underline{\quad} \text{ tens} + \underline{\quad} \text{ ones} = \underline{\quad}$$



$$= \underline{\quad} \text{ tens} + \underline{\quad} \text{ ones} = \underline{\quad}$$